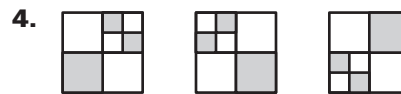




LESSON
2.1**Practice B***For use with pages 72–78***Sketch the next figure in the pattern.****Describe a pattern in the numbers. Write the next number in the pattern.****Graph the pattern on a number line.**

5. 113, 224, 335, 446, ...




6. 4, 6, 9, 13, 18, ...



7. $\frac{1}{3}, \frac{3}{4}, \frac{5}{5}, \frac{7}{6}, \dots$



8. $\frac{7}{8}, \frac{6}{7}, \frac{5}{6}, \frac{4}{5}, \dots$



9. 3, 0, -3, -6, ...




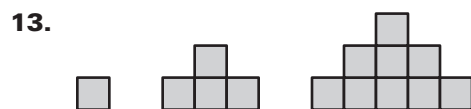
10. 1, 4, 9, 16, ...



11. 2, 5, 11, 23, ...



12. 2, 3, 5, 7, 11, ...

**The first three objects in a pattern are shown. How many squares are in the next object?**

LESSON
2.1**Practice B** *continued*
For use with pages 72–78**Show the conjecture is false by finding a counterexample.**

15. The quotient of two whole numbers is a whole number.
16. The difference of the absolute value of two numbers is positive, meaning $\Sigma a \Sigma - \Sigma b \Sigma > 0$.
17. If $m \neq -1$, then $\frac{m}{m+1} < 1$.
18. The square root of a number x is always less than x .

Write a function rule relating x and y .

19.

x	1	2	3
y	1	8	27

20.

x	1	2	3
y	-5	-3	-1

21.

x	1	2	3
y	4	3	2

22.

x	1	2	4
y	1	0.5	0.25

23. **Bacteria Growth** Suppose you are studying bacteria in biology class. The table shows the number of bacteria after n doubling periods. Your teacher asks you to predict the number of bacteria after 7 doubling periods. What would your prediction be?

n (periods)	0	1	2	3	4	5
billions of bacteria	4	8	16	32	64	128

24. **Chemistry** The half-life of an isotope is the amount of time it takes for half of the isotope to decay. Suppose you begin with 25 grams of Platinum-191, which has a half-life of 3 days. How many days will it take before there is less than 1 gram of the isotope?